

CLASS-VI

Feuille de révision (Revision worksheet)

Q1. Compréhension écrite

Lisez le texte et répondez aux questions.

Bonjour! Je m'appelle Aanvi. J'ai dix-neuf ans. J'habite avec ma famille dans une grande maison. Notre maison a deux étages. La chambre de mes parents est au rez-de-chaussée. Elle est très confortable. Ma chambre est au premier étage avec une grande salle de bains. Nous avons une belle cuisine. À gauche de la cuisine, il y a une salle à manger. Il y a un petit jardin plein de fleurs autour de la maison. J'aime beaucoup ma maison.

1. Répondez par une phrase complète.
 - a) Combien d'étages y-t-il dans la maison?
 - b) Est-ce qu'il y a un garage pour la voiture?

2. Complétez avec un mot du texte.
 - a) Janvier est le _____ mois de l'année.
 - b) Les _____ de Caroline sont jeunes.
 - c) Il dit _____ à M. Dubois.
 - d) Les enfants jouent dans le _____

3. Trouvez le contraire du texte.
 - a) Sans (without) _____
 - b) Déteste (dislike) _____
 - c) À droite (at the right side) _____
 - d) Petite (small/short) _____

Q2. Conjuguez les verbes suivants

- a) être
- b) Avoir
- c) Aller
- d) Parler
- e) Regarder

Q3 Mettez les articles indéfinis

- a) gomme
- b) Professeur
- c) Cartable
- d) Crayons

Q4 Trouvez la question

- a) C'es un stylo
- b) C'es t un chien
- c) C'est un homme
- d) Cesont des crayons.

Q5. Donnez les nombres cardinaux

- a) 52 _____
- b) 62 _____
- c) 48 _____
- d) 29 _____

Q6. Donnez le féminin du nom

- a) Un vedeur
- b) Un comedien
- c) Anglais
- d) Sportif

Q7. Complétez avec les pronoms sujets

- a) _____ suis français.
- b) _____ Sont étudiantes.
- c) _____ êtes médecin.
- d) _____ est petit.

Q8. Mettez les phrases au pluriel

- a) Je suis indien
- b) Il est petit
- c) Elle est étudiante
- d) Tu es grand

Q9. Complétez avec le verbe ou le pronom

- a) Nous _____ dans la classe
- b) _____ est petite
- c) Mari _____ étudiante
- d) Marc et Nicole _____ contents

Q10 Répondez

- a) Il y a combien de livres dans le sac?
- b) Vous vous appelez comment?
- c) Comment allez-vous?
- d) La France est bornée au sud par qui?

e) Quelle est l'hymne national de la France?

पुनरावृत्ति कार्य-पत्रक 1 (सितंबर २०२१-२२)

कक्षा-6

विषय हिंदी

प्रश्न 1. निम्नलिखित अशुद्ध वाक्यों को शुद्ध करके लिखिए -

- I. मैं चार भाई हूँ।
- II. वह बहुत धीमे आवाज़ में बोलती है।
- III. गायक गीत गए रही थी।

प्रश्न 2. निम्नलिखित मुहावरों के अर्थ लिखिए।

- I. नौ दो ग्यारह होना
- II. दाँतो तले ऊँगली दबाना
- III. पेट में चूहे कूदना
- IV. हाथ-पाँव फूल जाना

प्रश्न 3. निम्नलिखित शब्दों में दो-दो पर्यायवाची शब्द लिखिए

- I. सूरज
- II. निशा
- III. पंकज

प्रश्न 4. निम्नलिखित वाक्यों में से विशेषण शब्द छाँट कर लिखिए।

- I. सीता सुन्दर लड़की है।
- II. आम मीठा है।
- III. साड़ी लाल है।

प्रश्न 5. निम्नलिखित वाक्यों में कारक के भेद लिखिए -

- I. बन्दर छत से कूदा। "छत से" में कौनसा कारक भेद है ?
- II. सीता भोजन पकाती है। "सीता" में कौनसा कारक भेद है ?
- III. वह पेट्रोल से गाडी चलाता है। "पेट्रोल से" में कौनसा कारक भेद है।

प्रश्न 6. निम्नलिखित तत्सम शब्दों के तद्भव रूप लिखिए-

- I. अग्नि
- II. काक
- III. गृह

IV. आम्र

प्रश्न 7. निम्नलिखित प्रश्नों के उत्तर विस्तार से लिखिए -

- I. कंट्रोल रूम में जाकर छोटू ने क्या देखा वहाँ उसने क्या क्या हरकत की ?
- II. माँ मोहन ने ऐसे - ऐसे कहने पर क्यों घबरा रही थी
- III. अक्षरों की खोज का सिलसिला कब हुआ और उसका क्या फायदा हुआ
- IV. कवि के अनुसार चाँद की बीमारी कैसी है ?
- V. जब पहली बार लेखिका ने चश्मा लगाया तो किसने छेड़ा और क्या कहा?

प्रश्न 8. प्रश्नों के उत्तर लिखिए

- I. राम ने दंडक वन में कितने वर्ष बिताए |
- II. रानी कैकेयी के वरदान सुनकर राजा दशरथ की क्या दशा हुई ?
- III. दशरथ के जीवन में कब संचार हुआ ?

प्रश्न 9. अपने विद्यालय के प्राधानाचार्य को फीस माफ़ी के लिए प्रार्थना- पत्र लिखिए |

पुनरावृत्ति कार्य-पत्रक 2 (सितंबर २०२१-२२)

कक्षा-6

विषय हिंदी

प्रश्न 1. अपने विद्यालय के प्राधानाचार्य को विद्यालय में खेल का सामन उपलब्ध करने के लिए पत्र लिखिए ।

प्रश्न 2. निम्नलिखित शब्दों के तद्भव रूप लिखिए -

- I. नृत्य _____
- II. कर्म _____
- III. मयूर _____
- IV. सर्प _____

प्रश्न 3. नीचे दिए गए मुहावरों का वाक्यों में प्रयोग कीजिए-

- I. लाल पीला होना _____
- II. चकमा देना _____
- III. अक्ल का दुश्मन _____
- IV. कान भरना _____

प्रश्न 4. निम्नलिखित वाक्यों में विशेषण भेद लिखिए ।

- I. दो मीटर कपड़ा दे दो ।
- II. कक्षा में चालीस बच्चे हैं ।
- III. रमा लम्बी है ।
- IV. यह घर मेरा है ।

प्रश्न 5. कारकों के नाम और चिह्न / परसर्ग लिखिए -

प्रश्न 6. निम्नलिखित शब्दों में से शुद्ध शब्द छाँट कर लिखिए-

- I. कवयित्री , कवियित्री
- II. आशीर्वाद , आशीवार्द
- III. रचयिता , रचिययात्रा

प्रश्न 7. निम्नलिखित शब्दों के दो-दो पर्यायवाची शब्द लिखिए -

- I. आँख _____ , _____
- II. पुत्र _____ , _____
- III. मित्र _____ , _____

IV. वन _____ , _____

प्रश्न 8. नीचे दिए गए प्रश्नों के उत्तर लिखिए -

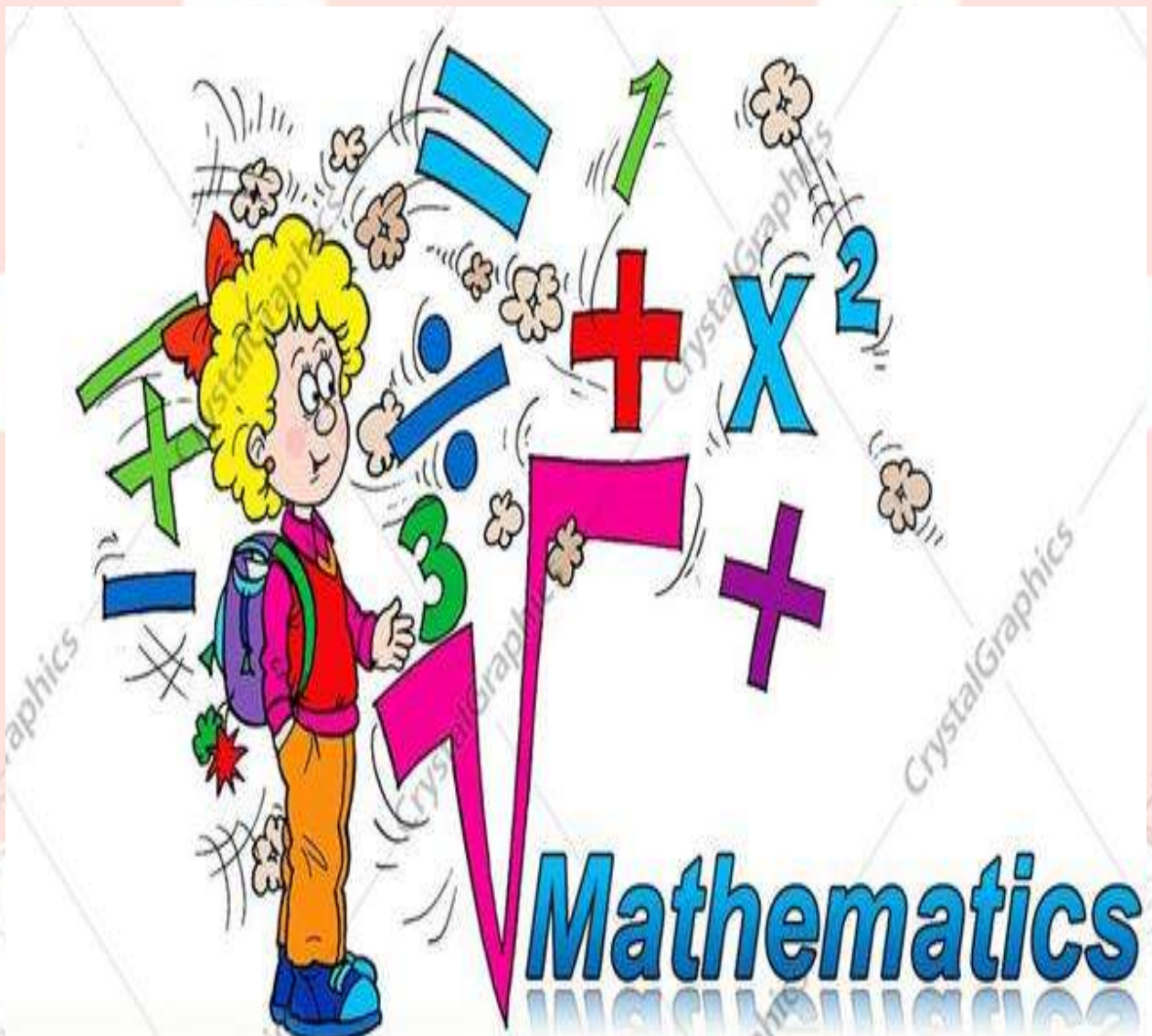
- I. छोटू के पिता कहाँ जाते थे और क्यों
- II. मानव ने सबसे पहले अपने भाव कैसे व्यक्त करने आरंभ किये ?
- III. लड़की को चाँद कैसा नज़र आ रहा है ?
- IV. बचपन में लेखिका को क्या-क्या काम करने पड़ते थे ?
- V. ऐसे कौन-कौन से बहाने होते हैं जिन्हें मास्टर जी एक बार में सुनकर समझ जाते हैं ?

प्रश्न 9. किसने कहा , किससे कहा -

- I. यह तुम क्या कह रही हो ? मुझे विश्वास नहीं होता की मैंने सही सुना है
- II. राम के लिए चौदह वर्ष से कम वनवास मत माँगना ।

Class – 6

September Assignment



General Instructions:

- 1. This assignment consist of worksheets based on Chapter - 4 (Basic Geometrical Ideas) and Chapter – 5 (Understanding Elementary Shapes).***
- 2. Worksheet-1 is based on Chapter – 4 (Basic Geometrical Ideas).***

3. *Worksheet- 2 is based on Chapter – 5 (Understanding Elementary Shapes).*


5.*Solve both the worksheets in your notebook.*

Worksheet – 1

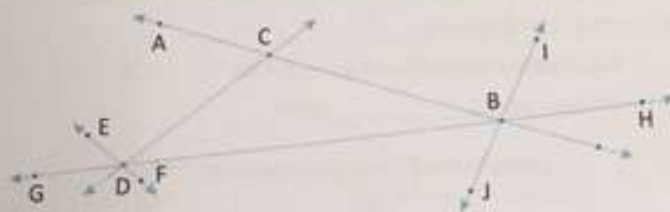
Basic Geometrical Ideas

A. In the given figure, name

- 4 line segments _____
- 2 rays _____
- 3 lines _____
- Concurrent lines _____ and their point of concurrence _____
- Collinear points _____ and their line of collinearity _____



B. Answer the following questions based on the given figure.



- Lines AB and GH intersect at _____.
- Lines EF and CD intersect at _____.
- From which point(s), are maximum number of lines passing? _____.
- Lines _____ and _____ intersect each other at C.
- Points A, C, and B are _____ because they all lie on the line AB.
- Lines AB, IJ and GH are called _____ because all of them pass through a common point.
- Points of concurrent lines are _____ and _____.
- A set of three concurrent lines are _____, _____ and _____.
- Collinear points on line GH are _____, _____, _____ and _____.
- _____, _____ and _____ are non-collinear points.

23

Mental Math – 6

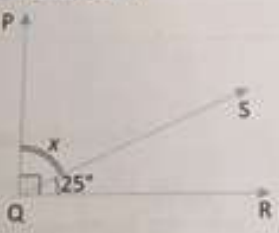
Worksheet - 2


Understanding Elementary Shapes


A. Match the following.


1. Acute angle	(a) half of a revolution
2. Obtuse angle	(b) more than half a revolution
3. Right angle	(c) less than one-fourth a revolution
4. Straight angle	(d) $\frac{1}{4}$ of a revolution
5. Reflex angle	(e) between $\frac{1}{4}$ and $\frac{1}{2}$ of a revolution

B. Find the value of x.


1. 


2. 

3. 

4. 

C. Find the measure of the angle between the hands of a clock in each figure.

1. 
10:00 am

2. 
8:00 pm

High-Order Thinking Skills (HOTS)

A bicycle wheel has 48 spokes. Find the angle formed between a pair of adjacent spokes.

Revision Worksheets (September-2021)
Subject - Social Science
Class - VI

General Instructions -

1. Do these worksheets on A4 size ruled sheets.
2. Do your work neatly.

Worksheet 1
History L-6 New Questions and Ideas

Very Short Answer Type Questions -

- Q1 Who was the founder of Buddhism?
Q2 Lord Mahavira belonged to which tribe?
Q3 Who were Bhikkhus?
Q4 Where did Buddha teach for the first time?
Q5 Who was Panini?
Q6 Who are Jains?
Q7 Name the book where rules made for the Buddhist Sanghas were written down?
Q8 Name the founder of Jainism.
Q9 Where did Buddha gain enlightenment?
Q10 Which was the language used to compose the Vedas?

Worksheet 2
Geography L-3 Motions of the Earth

Give one-word answer

1. The period of one rotation of the Earth is known as the -
2. A leap year occurs after every -
3. Days and nights occur on Earth due to -
4. The time of sunrise -
5. Change of seasons occur on the Earth due to -
6. Christmas is celebrated in summer in -
7. The period in which days and nights are equal all over the World -
8. Season in which nights are longer than the days -
9. Elliptical path of revolution of the Earth around the Sun -
10. Period of diffused light after sunset -

Worksheet 3

Civics L-3 What is Government?

Tick (✓) the correct answer -

- 1 What do governments do for their people?
 - a) Build the roads and Schools
 - b) Supply the electricity
 - c) Both (a) and (b)

- 2 What is an important part of the government?
 - a) Courts
 - b) Public Schools
 - c) Parliament

- 3 What does the government make for everyone to follow?
 - a) Laws
 - b) Decisions
 - c) Relations

- 4 Any person who is caught driving without a license can be?
 - a) Jailed
 - b) Fined a large sum of money
 - c) Both (a) and (b)

- 5 Which type of government is chosen by the people?
 - a) Monarchy
 - b) Democratic
 - c) Dictatorship

- 6 Women in UK gained the right to vote in -
 - a) 1928
 - b) 1938
 - c) 1948

- 7 Suffrage refers to -
 - a) The right to live
 - b) The right to eat
 - c) The right to vote

- 8 American women gained the right to vote in -
 - a) 1940
 - b) 1930

c) 1920

9 The government also works at the local level. 'Local' means -

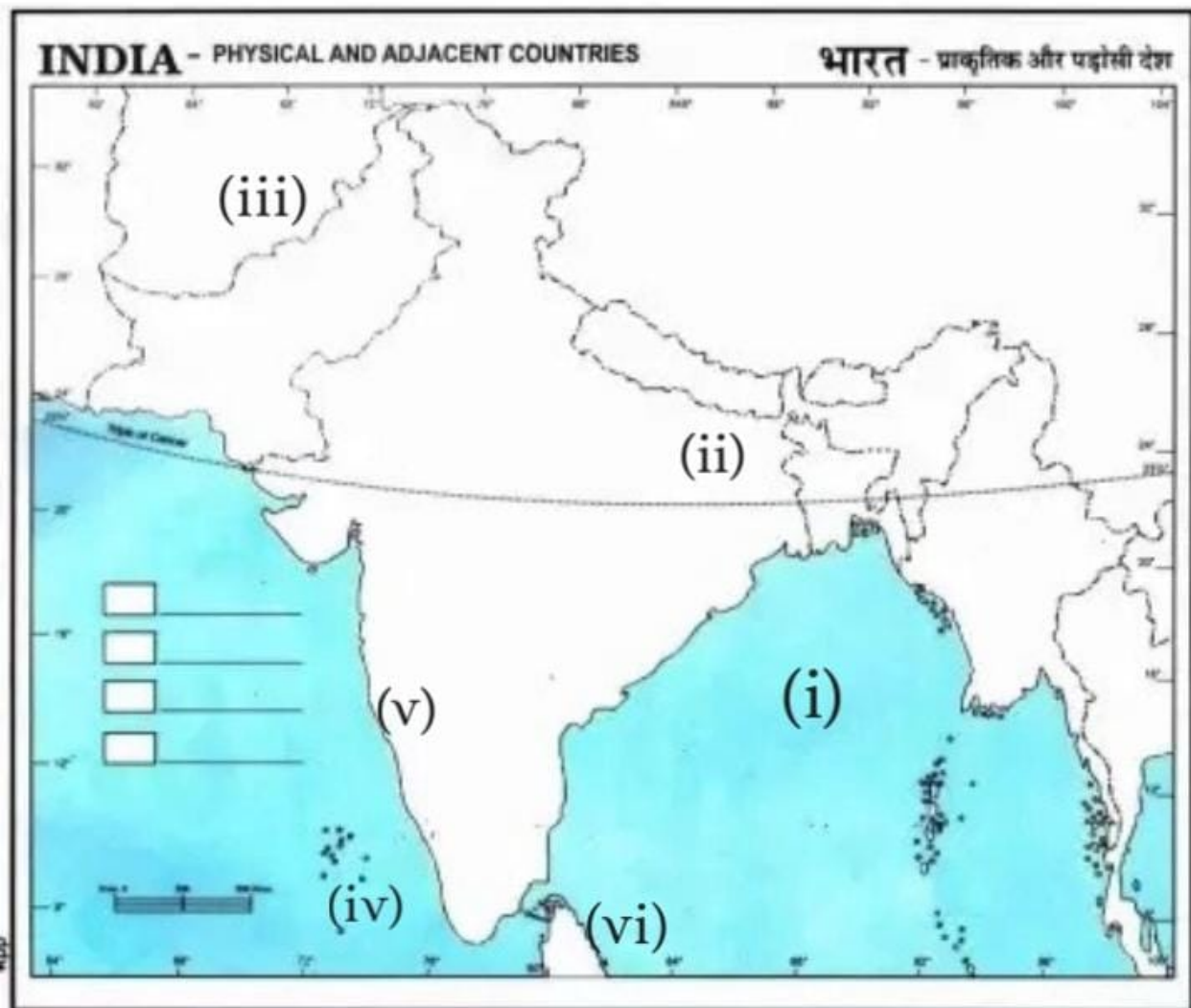
- a) Village
- b) Town
- c) Both (a) and (b)

10 The editor of 'The Journal of Young India' -

- a) Jawaharlal Nehru
- b) Mahatma Gandhi
- c) Ravindra Nath Tagore

Map Work

Q Six features (i), (ii), (iii), (iv), (v) and (vi) are shown on the given outline map of India. Identify these with the help of given information and write their name -



- (i) A waterbody towards the east of our country -
- (ii) A place where Lord Buddha gained enlightenment -
- (iii) Tin was brought from this country -
- (iv) Islands towards the west of India -
- (v) Gold was brought from this place -
- (vi) An Island neighbour of our country -

SEPTEMBER ASSIGNMENT-2021

SUBJECT- SCIENCE

CLASS VI

Complete the following worksheet. You can take a printout or solve it on any sheets available. Read and revise the chapters thoroughly before attempting the worksheet.

Q1 Name the following:

- (a) The nutrients which mainly give energy to our body.
- (b) The nutrients that are needed for the growth and maintenance of our body.
- (c) A vitamin required for maintaining good eyesight.
- (d) A mineral that is required for keeping our bones healthy.

Q2. Name two foods each rich in:

- (a) Fats
- (b) Starch
- (c) Dietary fibre
- (d) Protein

Q3 Tick the Correct Option:

i. Vitamins are essential for the body to:

- (a) supply energy
- (b) make new cells
- (c) protect it from diseases
- (d) grow fast

ii. Which one of the following constitutes balanced diet?

- (a) Roti, rice, dal, vegetables, pickle
- (b) Parantha, butter, curd, egg, fruits
- (c) Rice, samber, idle, pickle, fruits
- (d) Roti, dal, salad, vegetables

iii. Goitre occurs due to the deficiency of :

- (a) chlorine

- (b) potassium
- (c) iodine
- (d) iron

iv. Our hair and nails contain :

- (a) calcium
- (b) phosphorus
- (c) fluorine
- (d) proteins

v. is used to separate a mixture of wheat and husk.

- (a) Magnetic separation
- (b) Threshing
- (c) Winnowing
- (d) Sieving

vi. Which of the following was not used by ancient person for the measurement of length?

- (a) Foot
- (b) Metre scale
- (c) Cubit
- (d) Handspan

vii. Shadows form because:

- (a) opaque objects reflect light
- (b) opaque objects do not allow light to pass through them
- (c) light travels in one direction from a source
- (d) light bends around an opaque object

viii. The colour of a shadow is :

- (a) black
- (b) green
- (c) grey
- d) pink

Q 4 Fill in the blanks

- i. The method of separating seeds of paddy from its stalks is called
- ii. When milk, cooled after boiling, is poured onto a piece of cloth the cream (malai) is left behind on it. This process of separating cream from milk is an example of
- iii. Salt is obtained from seawater by the process of.....
- iv. Impurities settled at the bottom when muddy water was kept overnight in a bucket. The clean water was then poured off from the top. The process of separation used in this example is called
- v. Five kilometre is m.
- vi. Motion of a child on a swing is
- vii. Motion of the needle of a sewing machine is
- viii. Motion of wheel of a bicycle is

Q 5 Observe the diagram(s) given below and name the process used:



Q 6 Observe the following diagrams and write the type of motion of these objects exhibit while in action or being played.

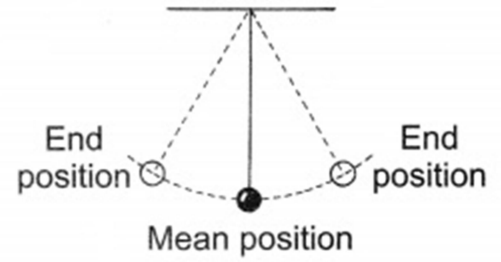
1.




2.



3.



4.



5.



6.



Q7.

MCQ - Tick (✓) the correct option -

How many pairs of legs does a cockroach have ?

- a) One c) Three
 b) Two d) Four

Which body part of a fish helps in changing the directions of movement while swimming.

- a) Tail c) Fins
 b) Gills d) Eyes

The joint between the thigh bone and the hip bone is.


- a) Pivot joint c) Hinge joint
 b) Gliding joint d) Ball and socket joint

Bone and cartilage forms the

- a) Reproductive system c) Skeletal system
 b) Nervous system d) Circulatory system

Q8.

Can you identify the following -



Q 9 . Write the letter in the blanks given below with the help of corresponding hints.

1. T _ _ _ S _ _ _ _ T.

Hint: Through these objects, we can see but not very clearly.

2. _ _ M _ N _ _ S.

Hint: Sun is in this category of sources of light.

SEPTEMBER ASSIGNMENT

CLASS-6 ENGLISH

Revision Exercises

Q1. Read the following passage and answer the questions that follow-

The new Everest expedition was ready to start. Tenzing put on his best clothes and went to as for a job as a porter. But things went wrong again. Tenzing cut his hair short because the Indian boys laughed at his long hair. They teased him saying that he looked like a girl. He was left out by the party of climbers as he did not look like a Sherpa. He could not speak English to explain himself. He felt disappointed when the party left without him. But in spite of his disappointments, time and again, he never gave up the hope of climbing the mountains.

Questions

1. What did Tenzing ask for?
2. Why did Tenzing have his haircut?
3. Why did he not get the job?
4. How did he feel when he did not get the job?
5. Find a word/phrase in the passage which means 'ridiculed'.
6. What lesson did you learn from the passage?

Q2. FILL IN THE BLANKS WITH THE APPROPRIATE FORM OF VERBS GIVEN-

1. She wasn't feeling well. So she(eat) much.
2. It(rain) hard at 5 o'clock last evening.
3. She(have) tea when I saw her.
4. What(was) you(do) when the guest arrived?
5. She told me his name after he(go).
6. The patient(die) before the doctor came.

Q6. Complete the following sentences using appropriate determiners.

1. I want to be good doctor when I grow up. (a / the)
2. If you know the answer, raise hand. (your / yours)
3. Go and buy more mangoes. We haven't got (some / any / many / much)
4. I haven't invited people to the party so I haven't got work to do. (many / much / some / any)
5. At last patriot in him revolted. (a / the)
6. There is rice in this bag. (many / any / some)
7. Kalidas is Shakespeare of India. (the / a)
8. She hasn't got friends. (many / much)
9. He didn't eat rice. (much / many)
10. You ate only rice. (little / a little)

पुनरावृत्ति-कार्यपत्रिका (सितम्बर)

कक्षा-षष्ठी,विषय-संस्कृतम्

1.प्रश्न: निम्न पदानाम् हिंदी अर्थम् लिखत-

(क)पत्रिका	आवरणम्	लेखन्या
(ख)चित्रका:	प्रसादः	श्रमेण
(ग)तिष्ठन्ति	चषकः	चरणाभ्याम्

2.प्रश्न: निम्न संस्कृत वाक्यानाम् अनुवादं कुरुत-

निम्न संस्कृत वाक्यों का हिंदी अनुवाद लिखिए-

(क) वयम् नेत्राभ्याम् पश्यामः।

(ख) राधा बसयानेन नगरम् गच्छति।

(ग) पितामहः यज्ञम् करोति।

(घ) अध्यापकौ तिष्ठतः।

(ङ) यूयम् क्रीडिष्यथ।

3.प्रश्न:निम्न बालगीतं/पद्यांशं पठित्वा तेषाम् प्रश्नान् उत्तरत-

निम्न बालगीत/पद्यांश पढ़कर प्रश्नों के उत्तर दीजिए-

सारिका:

चीं चीं चीं चीं ध्वनिं कर्तुम्

आगता: सारिका: आगता:।

पतितान् अन्नकणान् खादितुम्

अस्माभिः सह क्रीडितुम्

आगता: सारिका: आगता:।

एक पदेन उत्तरत- (एक पद में उत्तर दीजिए।)

(क) बालगीतस्य शीर्षकः किं अस्ति?

(ख) सारिकाः कीदृशम् ध्वनिं करोति?

पूर्णवाक्येन उत्तरत- पूर्णवाक्य में उत्तर दीजिए-

(क) सारिकाः किं खादति?

(ख) जनाः सारिकाम् किम् वदन्ति?

4 प्रश्नः निम्न धातु रूपाणि लट् लकारे त्रयः पुरुषाः त्रीणि वचनानि लिखत-

निम्न धातु रूपों को लट् लकार में तीनों पुरुषों व तीनों वचनों में लिखिए-

कृ, अस् भू गम्,

5 प्रश्नः निम्न शब्द रूपों को तीनों वचनों में (प्रथमा से सम्बोधनम्) तक लिखिए-

बालक, लता, फल

6 प्रश्नः निम्न सर्वनाम पदों से रिक्त स्थानों की पूर्ति कीजिए-

(क) _____ फलम्। (एषा, एषः एतत्)

(ख) _____ छात्राः। (एताः एतानि, एते)

(ग) _____ गजौ। (एते, एतौ एतानि)

(घ) _____ कलिकाः। (ताः तानि, ते)

7 प्रश्नः निम्न शब्दानां वाक्यानि रचयत-

नीचे दिए गए शब्दों की वाक्य रचना कीजिए-

(क) जनकेन

(ख) पुस्तकम्

(ग) तरन्ति

(घ) वदथ

(ङ) हसामः

